


JMÉNO:.....


DATUM:.....

GEOMETRIE - ZÁKLADNÍ ÚTVARY V ROVINĚ

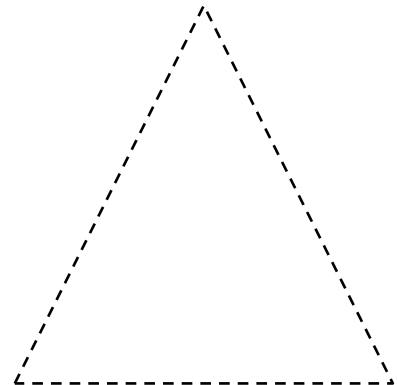
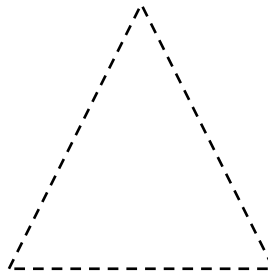

TROJÚHELNÍK



ČTVEREC






NAPIŠ, JAK SE ÚTVAR JMENUJE, OBKRESLI TUŽKOU, ZAKROUŽKUJ NEJVĚTŠÍ, VŠE VYBARVI.



.....

NAPIŠ, JAK SE ÚTVAR JMENUJE, OBKRESLI TUŽKOU, ZAKROUŽKUJ NEJVĚTŠÍ, VŠE VYBARVI.




.....

OBDÉLNÍK



KRUH

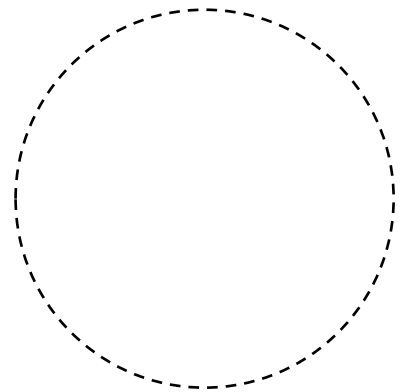
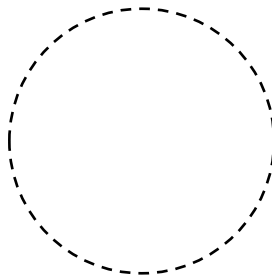
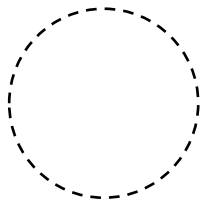



NAPIŠ, JAK SE ÚTVAR JMENUJE, OBKRESLI TUŽKOU, ZAKROUŽKUJ NEJVĚTŠÍ, VŠE VYBARVI.



.....

NAPIŠ, JAK SE ÚTVAR JMENUJE, OBKRESLI TUŽKOU, ZAKROUŽKUJ NEJVĚTŠÍ, VŠE VYBARVI.



.....